

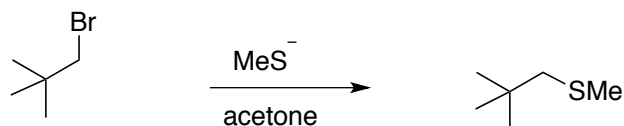
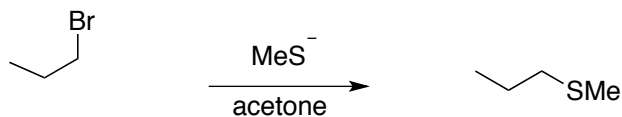
Quiz 2 (Friday Morning)

Name:

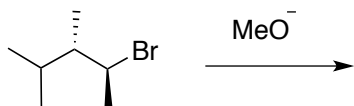
Recitation Instructor:

The following quiz is 20 points. You have 20 minutes to complete it. Good Luck!

1. Predict which of the following SN2 reactions would go faster. Briefly explain your answer. (5 points)



2. Predict the product of the following E2 reaction? (5 points)



3. Show two major resonance forms of the following compound, and show mechanisms for their interconversion. (10 points)

